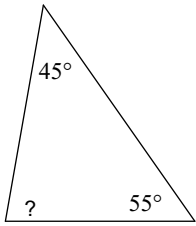


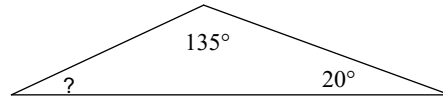
### 4.3 Practice

Find the measure of each angle indicated.

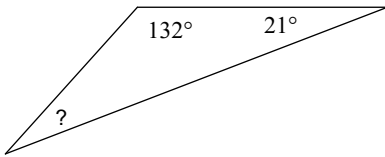
1)



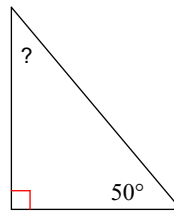
2)



3)

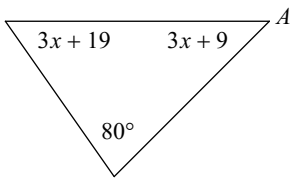


4)

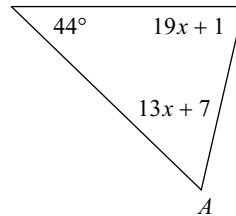


Find the measure of angle A.

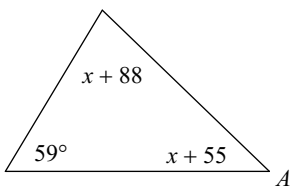
5)



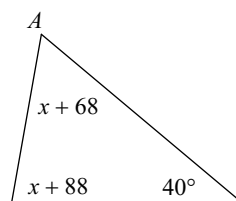
6)



7)

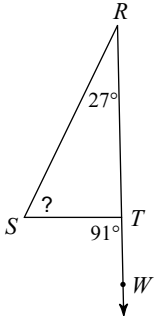


8)

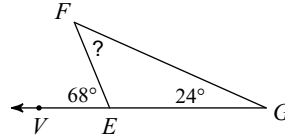


Find the measure of each angle indicated.

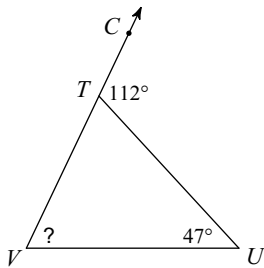
9)



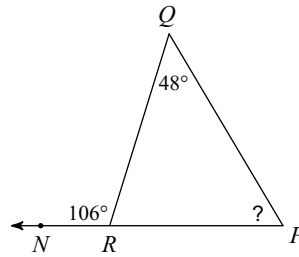
10)



11)

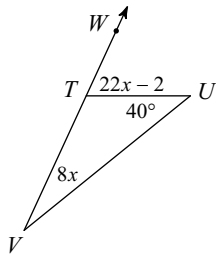


12)

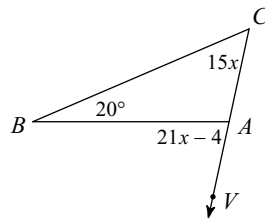


Find the measure of the angle indicated.

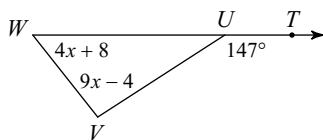
13) Find  $m\angle WTU$ .



14) Find  $m\angle C$ .



15) Find  $m\angle W$ .



16) Find  $m\angle E$ .

